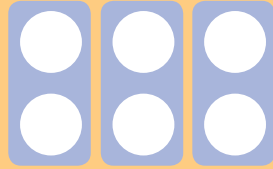


Number Shape Multiplication 10x Tables


I can write multiplication statements using the multiplication and equals signs.

For each image, write the multiplication fact shown.


For example:




$$3 \times 2 = 6$$




$$\square \times \square = \square$$




$$\square \times \square = \square$$



$$\square \times \square = \square$$



$$\square \times \square = \square$$



$$\square \times \square = \square$$


Challenge:

Amina says, "3 × 10 is greater than 7 × 5."


Is she correct?

Use your number shapes to show how you know.


Answers




$$2 \times 10 = 20$$




$$6 \times 10 = 60$$



$$5 \times 10 = 50$$



$$8 \times 10 = 80$$



$$3 \times 10 = 30$$

Challenge:

She is incorrect.

Children might line up three of the 10 number shapes and seven of the 5 number shapes to show the inequality.